



Name the Note: Treble - III

Name & Teacher _____




A musical staff in treble clef showing five quarter notes: C (middle C), D, E, F, and G. The notes are positioned on the first, second, third, fourth, and fifth lines of the staff respectively.


C D E F G




A musical staff in treble clef showing five quarter notes: G, F, E, D, and C. The notes are positioned on the fifth, fourth, third, second, and first lines of the staff respectively.



A musical staff in treble clef showing seven quarter notes: B, A, G, F, E, D, and C. The notes are positioned on the fourth, third, second, first, first space, second space, and second space of the staff respectively.



A musical staff in treble clef showing seven quarter notes: B, A, G, F, E, D, and C. The notes are positioned on the fourth, third, second, first, first space, second space, and second space of the staff respectively.



A musical staff in treble clef showing seven quarter notes: B, A, G, F, E, D, and C. The notes are positioned on the fourth, third, second, first, first space, second space, and second space of the staff respectively.
